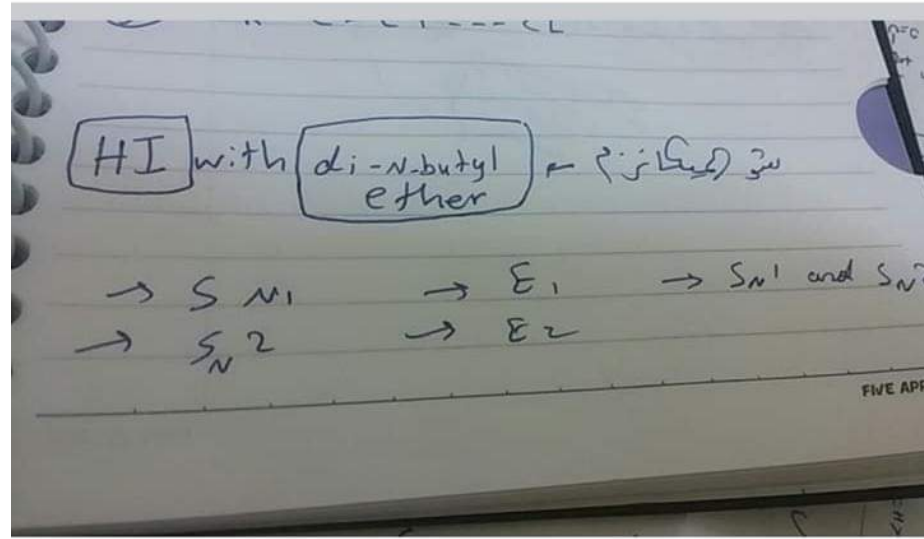


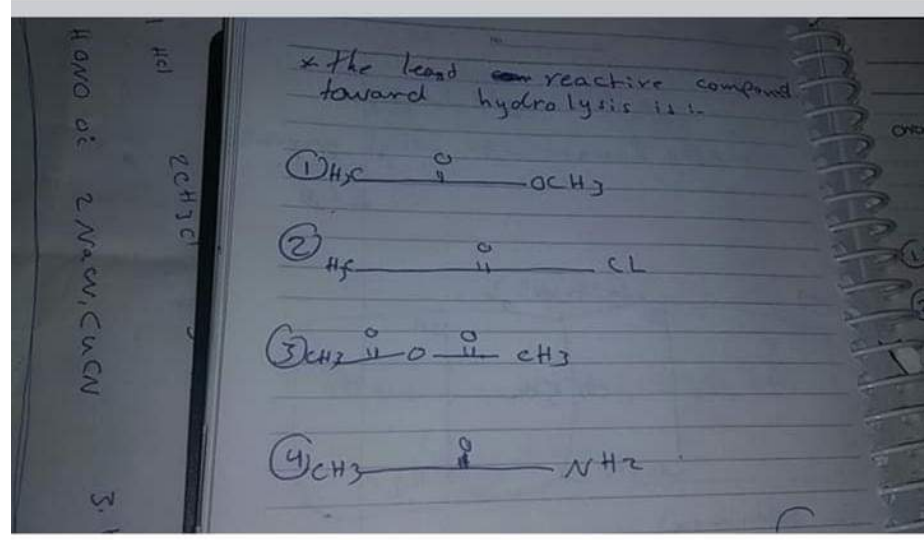
Shatha's Post

Like Comment



2 Comments

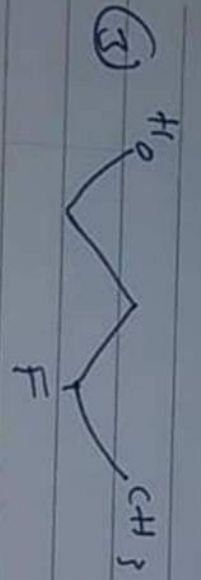
Like Comment



2 Comments

Like Comment

Strongest acid hydrogen?

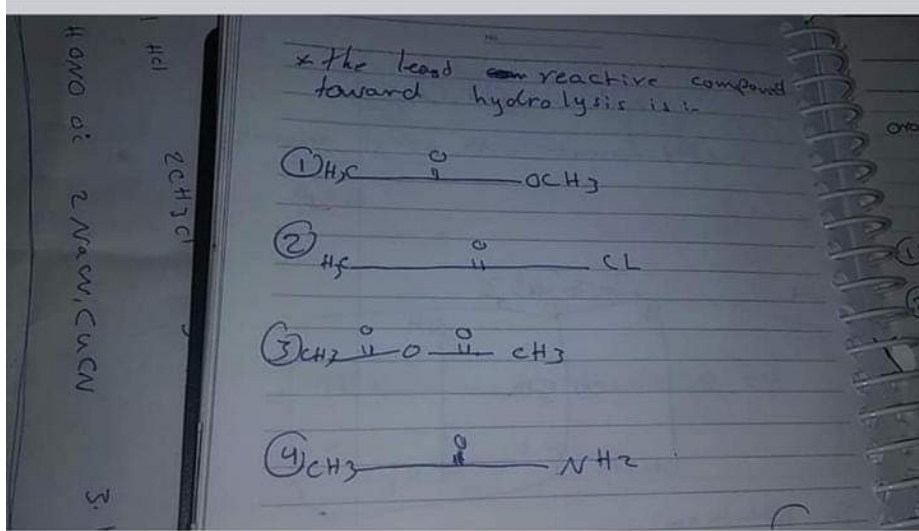




Hamzeh's Post

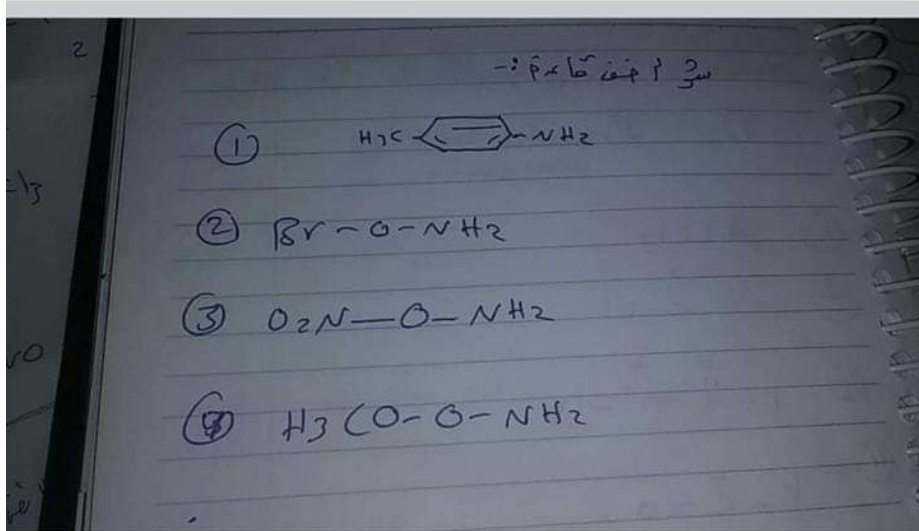
Like

Comment




Like

Comment



Like

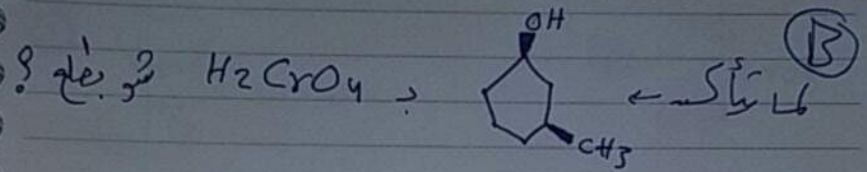
Comment



سؤالات؟ (کیمیائی) (A)

① M, 1, 2, 3, alkyl and aryl halides may be used.

② it can be prepared in presence of other functional group such as hydroxyl group.



① aldehyde, meso \rightarrow optically inactive.

② ketone, optically active.

③ racemic mixture of ketones (optically inactive ketones)

④ ketone, meso, optically inactive?

pressure
cell (RBC) formation

kidneys
(means urine)
formed with the



Search Facebook

**Hamzeh Sar**

December 30, 2018 ·



سؤال ما هي التست او الاختبار الي بنميّز فيه
الألل عن البروبل.....



1

12 Comments



Like



Comment

**Rokayah Mah**

December 30, 2018 ·



جاب النا صيغ واي وحده منهم هي بتمثل
Hydrazone
وين مكانها بالكتاب صوروها الي
للأجيال القادمة الكتاب ثم الكتاب كلو اكل



Hamzeh Sar

5 Comments



Like



Comment

**Hamzeh Sar**

December 30, 2018 ·



اغلب الامتحان على الامينات وجابتر ١٠ وقليل من مادة
الفيرست.... واجا سؤال على اي واحدة هي اروماتك رنغ..... ركزو... شو
هيه.... وعلى الهوكل



1

9 Comments



Like

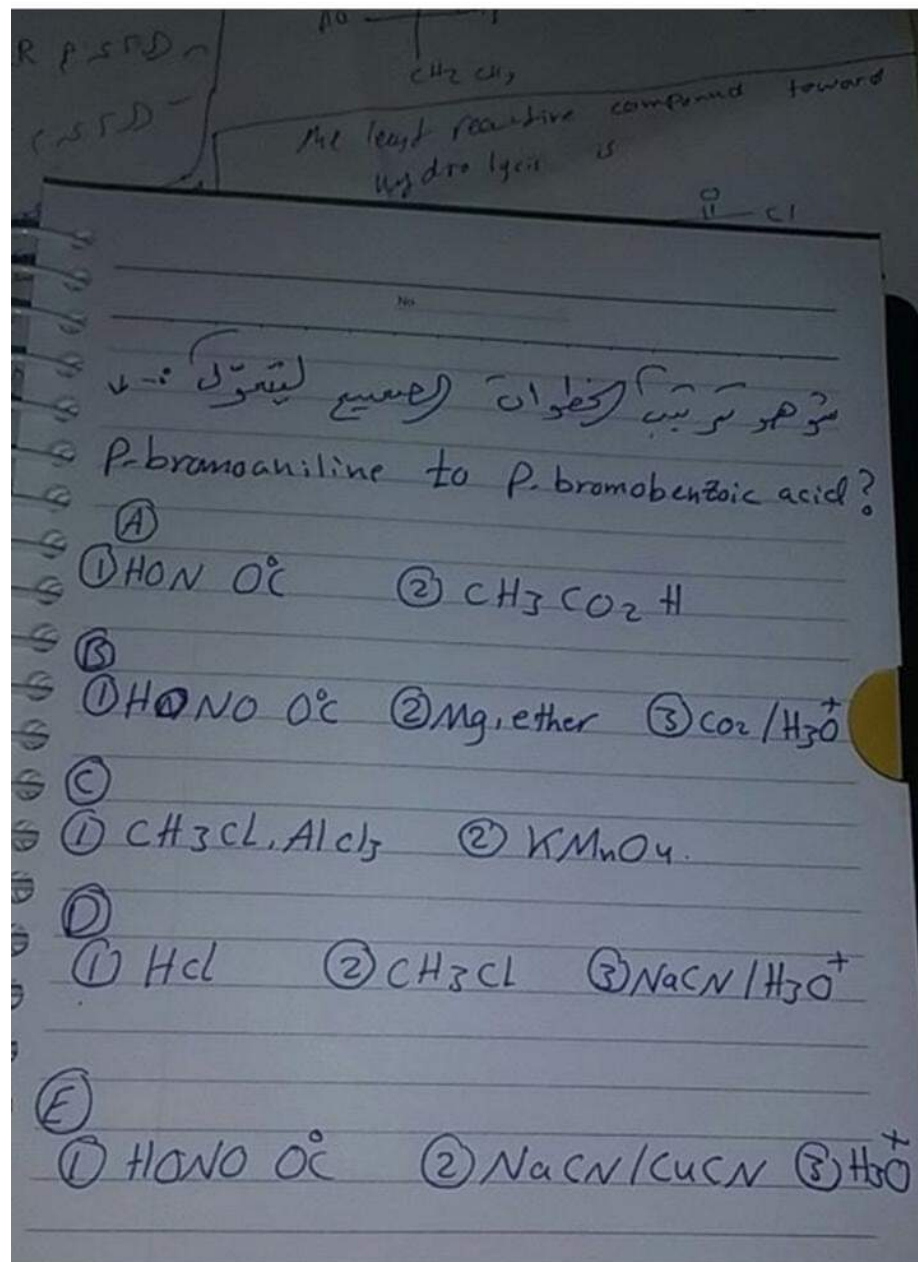


Comment





Search Facebook



13 Comments





Search Facebook



يوسف حاتم الطراونه

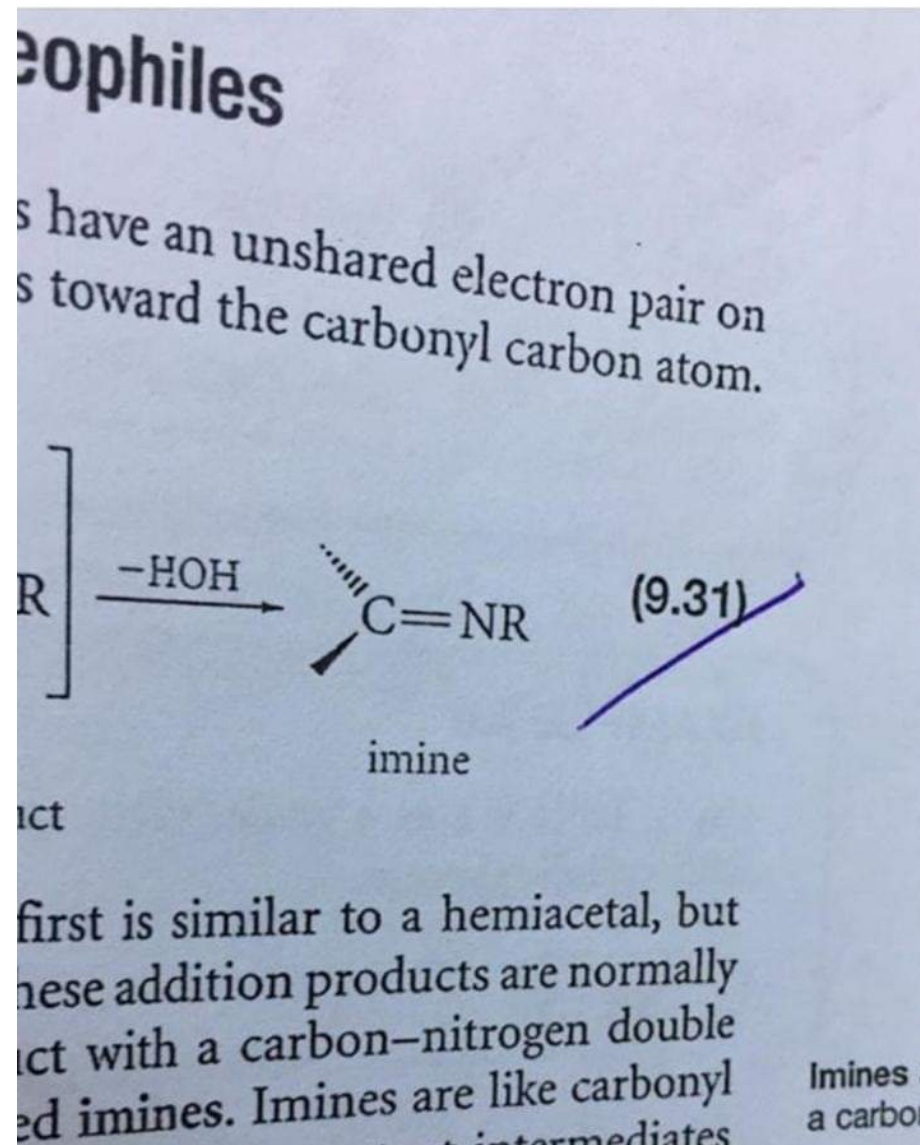
December 30, 2018 · 🌐



جاب النا شو صيغة ال

Imine

بتكون مثل هيك





Search Facebook

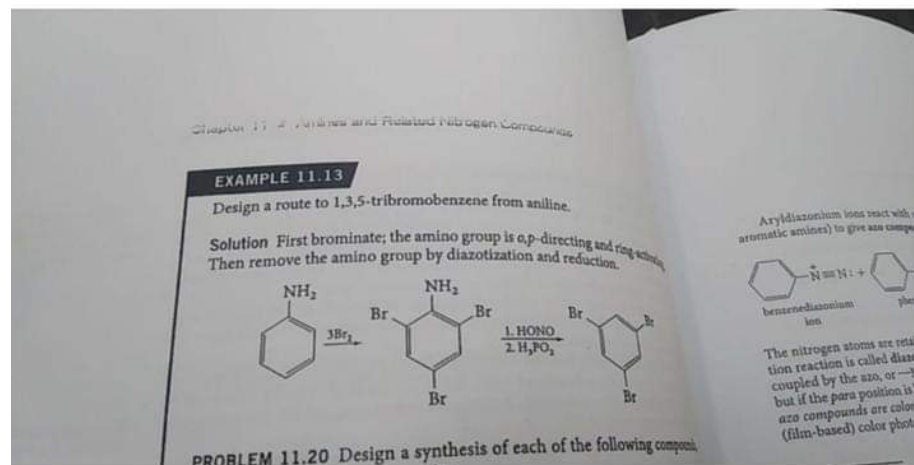


Rokayah Mah

December 30, 2018 · 🧑



جواب النا هاذ السؤال



❤️ Hamzeh Sar and 2 others

👍 Like

💬 Comment



Feras A. Ahmad

December 30, 2018 · 🧑



عشان الاجيال القادمة ... لا تدرسو المركبات ال
open chain study cycle chain only and I guarantee you
success

👍🙄 Mo'taz Ibrahim and 3 others

👍 Like

💬 Comment





Search Facebook

Like

Comment

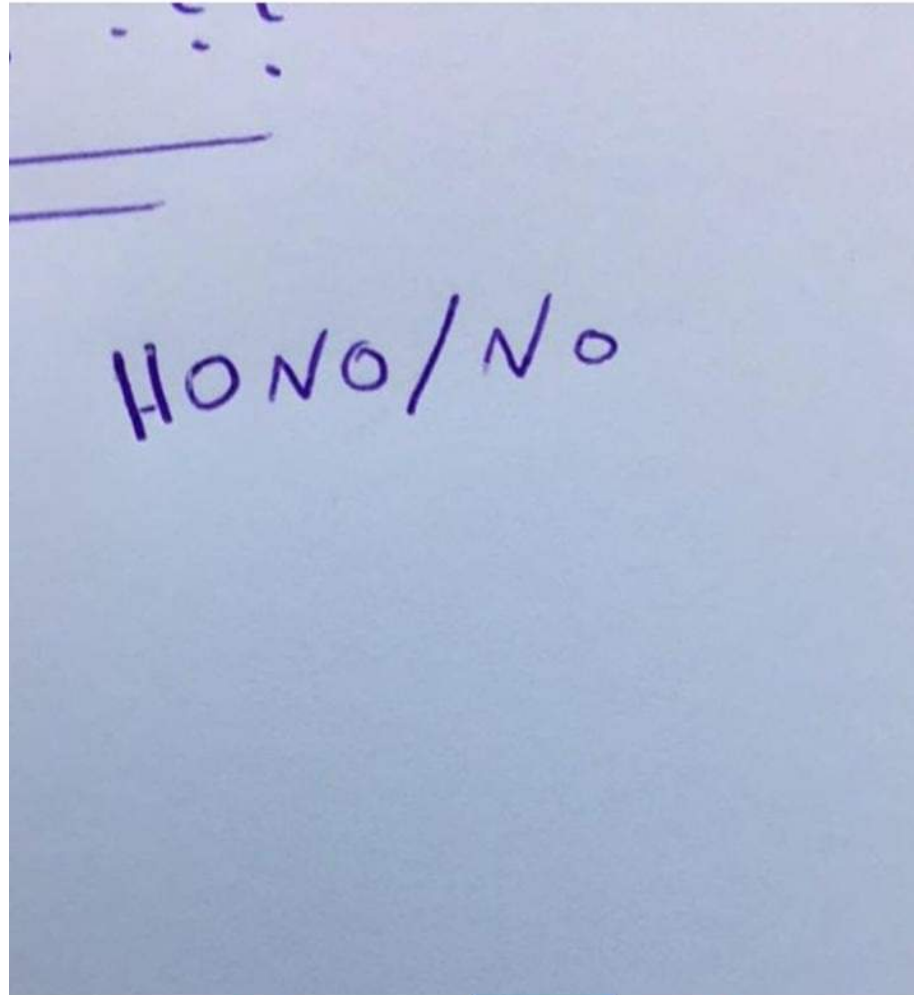


يوسف حاتم الطراونة



December 30, 2018 · 🌐

في تكوين ال
Diazonioum salt
شو هو الانترميديت كانه
انا حطيته هذا



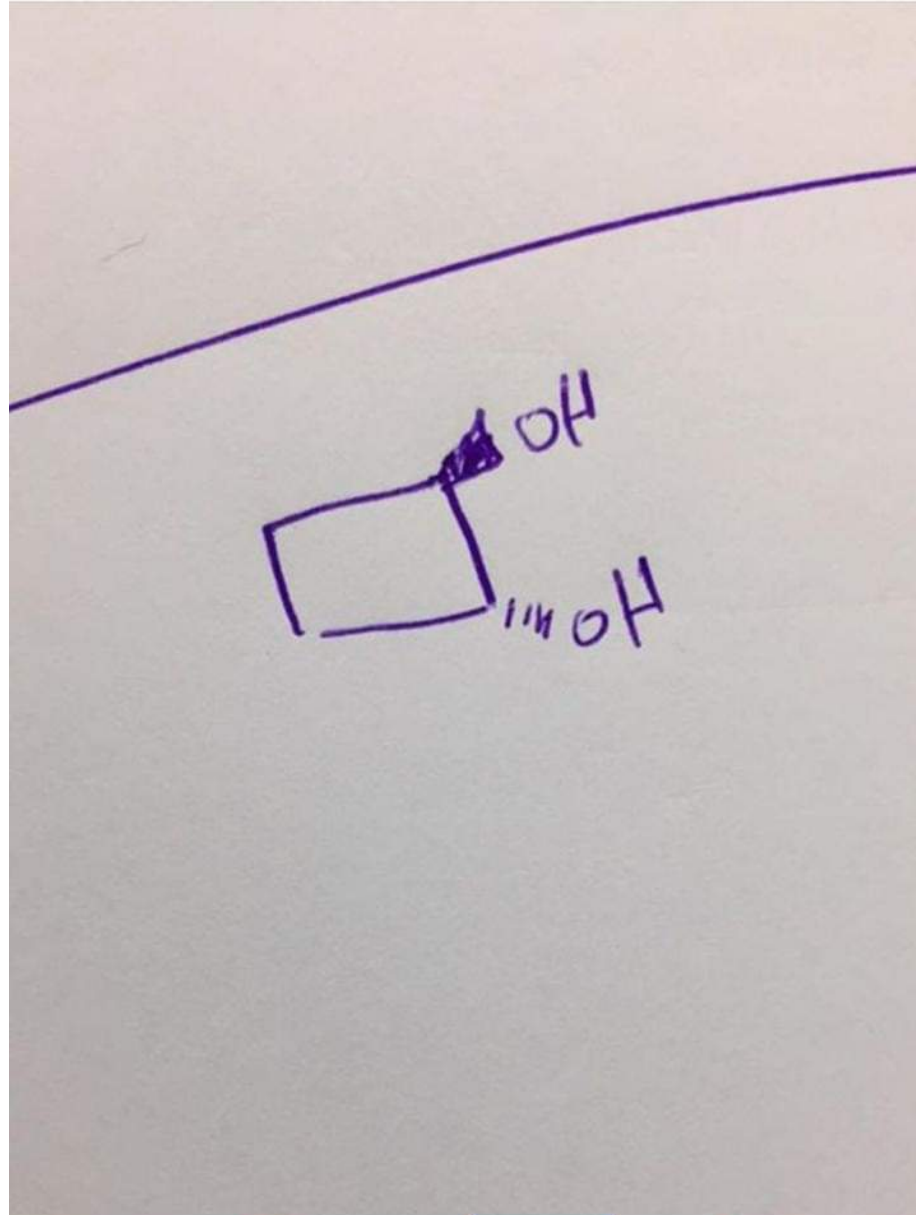


Search Facebook



December 30, 2018 ·

انا حطيتيه
Chiral



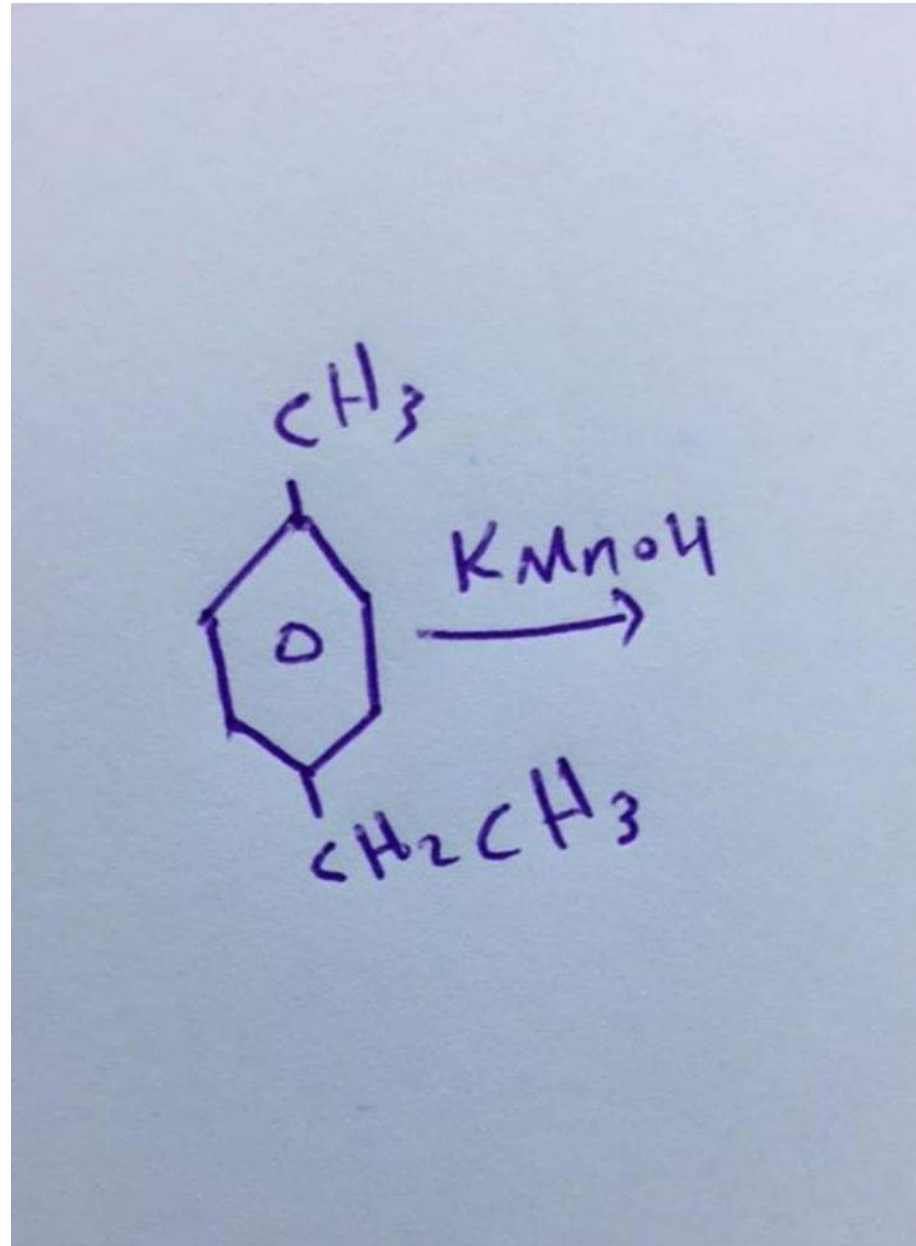


Search Facebook



December 30, 2018 · 📺

شو ناتج هذا التفاعل كأنه هذا هو العامل المؤكسد





عبدالله's Post



Like



Comment

students

9

answered

of 1.00

question

The name 2,4-dibromobenzene is incorrect. Which of the following is the correct

Select one:

- a. 1,5-dibromobenzene
- b. dibromobenzene
- c. *m*-dibromobenzene
- d. 3,5-dibromobenzene

10

answered

of 1.00

question

The mechanism of bromination of alkenes with Br_2/CCl_4 proceeds via:

Select one:

- a. electrophilic addition
- b. free radical substitution
- c. Electrophilic substitution
- d. nucleophilic addition



Like



Comment



Search Facebook

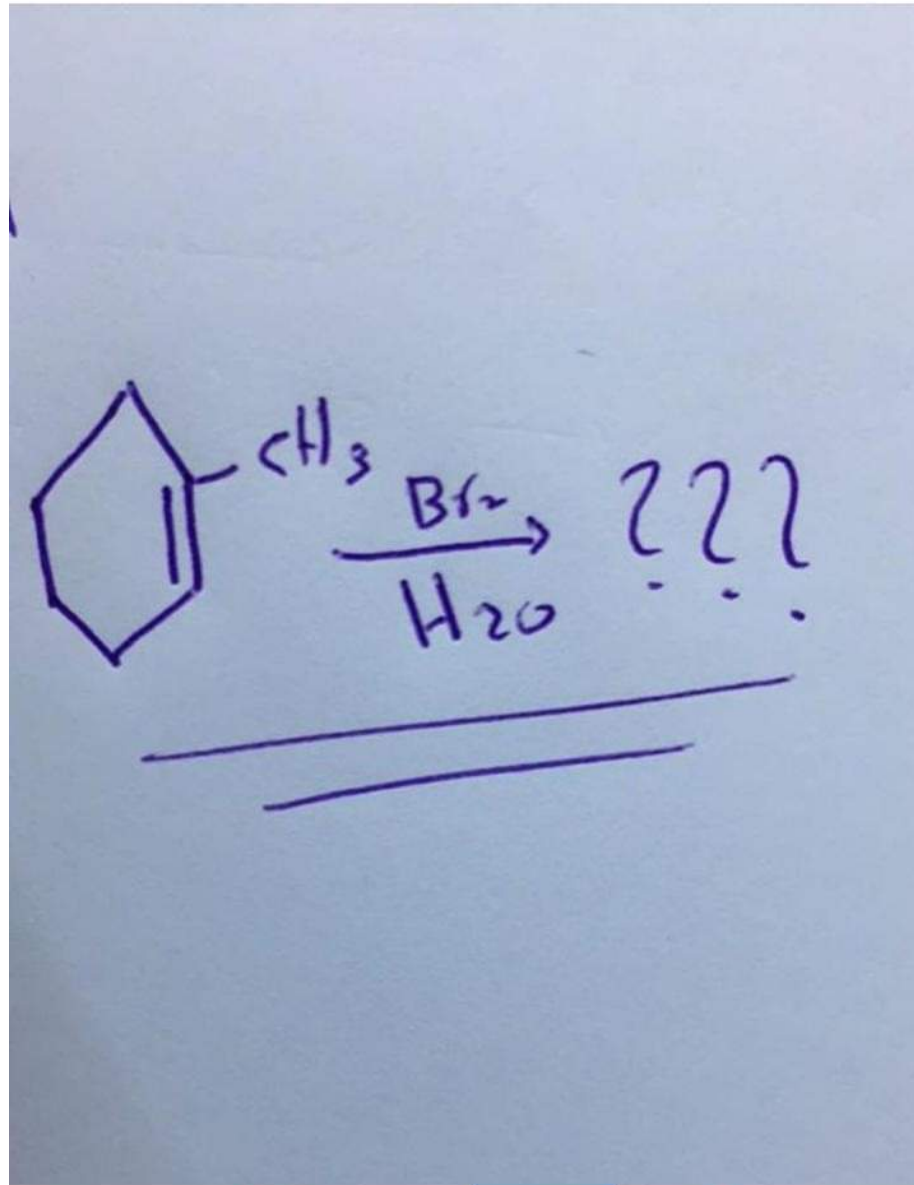


يوسف حاتم الطراونة

December 30, 2018 · 🧑🏻




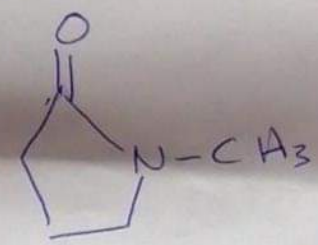
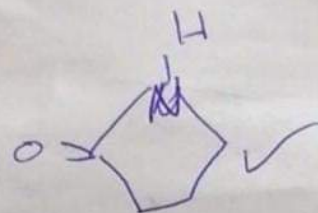
هذا سؤال كان صعب شوي





7

2° amide?



See More 😊 الوحيد الي عرفت اقرأه

Hamzeh Sar and 1 other

14 Comments





Search Facebook



يوسف حاتم الطراونة

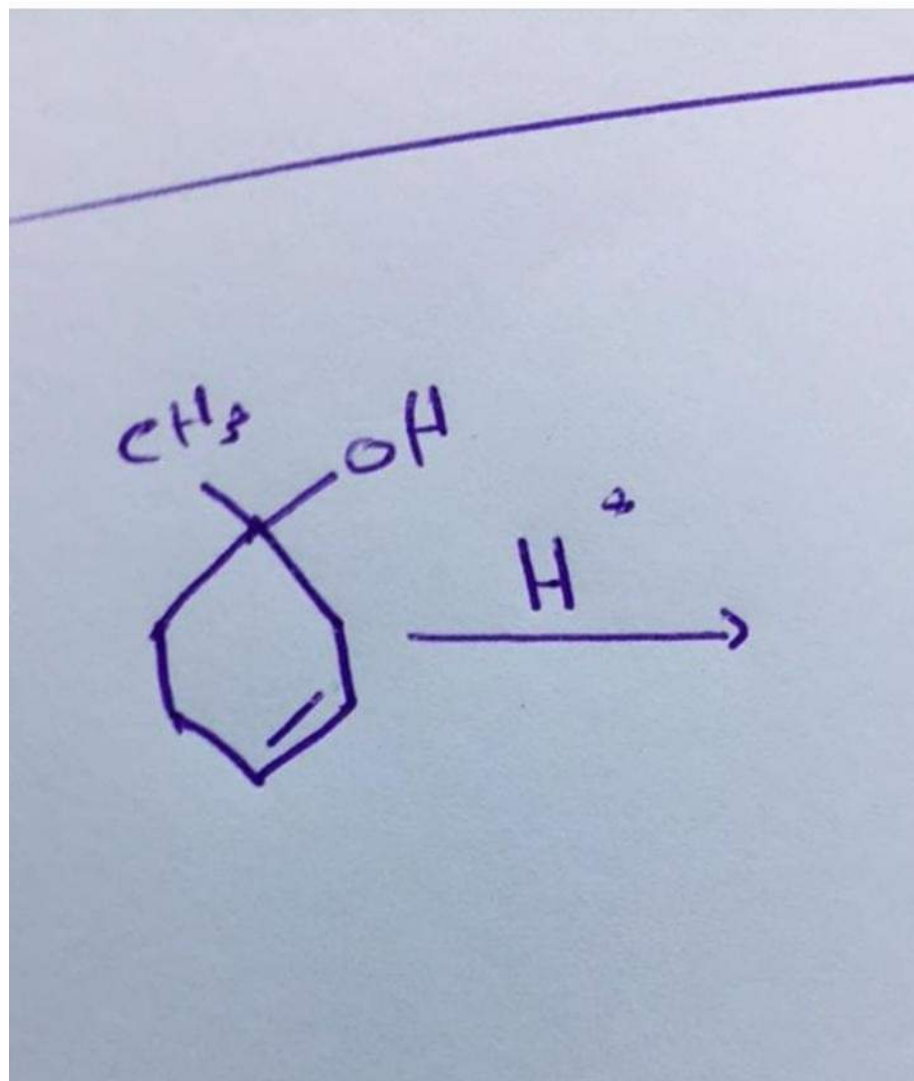
December 30, 2018 ·



شو كان الناتج الاكثر من هذا التفاعل


Dehydration

وجاب النا عدة اشكال نحط مين اكثرهم في النواتج





Search Facebook

 Hamzeh Sar and 1 other

4 Comments

 Like Comment**Rakan Aljabsheh**December 30, 2018 · 

ركزوا على الامينات و بالاخص تفاعلات ال
diazonium

 Hamzeh Sar and 1 other

1 Comment

 Like Comment**يوسف حاتم الطراونة**December 30, 2018 · 

في تكوين ال
Diazonium salt
شو هو الانترميديت كانه





Search Facebook



Hamzeh Sar and 1 other

3 Comments



Like



Comment

**Rokayah Mah**

December 30, 2018 · 📍

جاب النا شو صيغة ال phathalic acid



Hamzeh Sar and 2 others



Like



Comment

**Rokayah Mah**

December 30, 2018 · 📍

جاب النا الكراون ايثر كيف بنسميه



Hamzeh Sar and 1 other

1 Comment



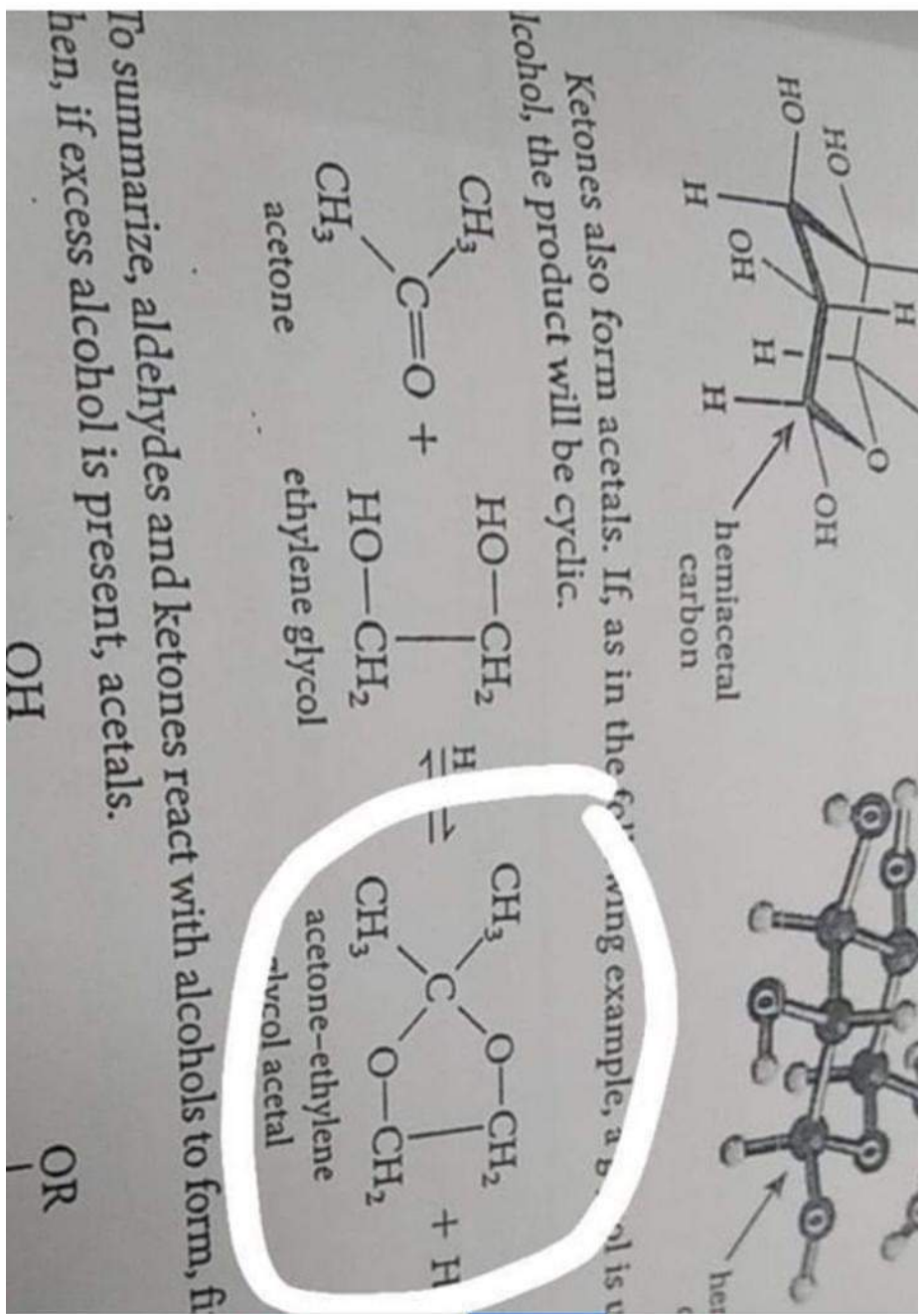
Like



Comment



جاب النا شي بطلع هيك الناتج أو كام بين الخيارات





أرشيف اورغانيك فاينال ▶ احمد كمال دويكات

December 30, 2018 · 🧑



في سؤال...

شو نوع mechanism اللي في تفاعل تحطم الايثر بوجود HI...

اتوقع كان الجواب.....



Like



Comment

🔥 Hamzeh Sar and 1 other



Feras A. Ahmad

.

1y Like Reply



Naba Essa Al-Saraireh

Sn1 ? ❤️

1y Like Reply



Feras A. Ahmad

وانا حطيت sn1

1y Like Reply



Feras A. Ahmad

بس مش متأكد ابدا

1y Like Reply



Naba Essa Al-Saraireh

صح صح 🥰❤️



Write a comment...





Search Facebook

**Jana Nassar**

December 30, 2018 ·



P-bormoaniline

What is the best method to make it

P-bromobenzoic acid



Hamzeh Sar



Like



Comment

**يوسف حاتم الطراونة**

December 30, 2018 ·



جاب النا شو تسمية

Methylpropylamine

على نظام CA



Hamzeh Sar

3 Comments



Like



Comment

**Jana Nassar**

December 30, 2018 ·



سؤال على صيغه Phthalic acid



Like



Comment





Search Facebook

سؤال على صيغته Phthalic acid

Like

Comment



يوسف حاتم الطراونة

December 30, 2018 ·

جاب النا سؤال شو هو شكل ال
Malonic acid

Hamzeh Sar

Like

Comment



Jana Nassar

December 30, 2018 ·

Reaction:

 $R(O^{18})H + RCOOH$ $\{Labeled\ O\} \sim (O^{18})$ بينتج $RCOOR + H_2O$ وين ال Labeled O في النواتج

Hamzeh Sar and 1 other

3 Comments

Like

Comment



Duaa Sarairah

December 30, 2018 ·

الوحيد الي عرفت اقرأه 😊





Search Facebook



يوسف حاتم الطراونة

December 30, 2018 · 📍



شو شكل
(R) -4- octanol
كأنه هيك كان السؤال

📍 Hamzeh Sar and 1 other

👍 Like

💬 Comment

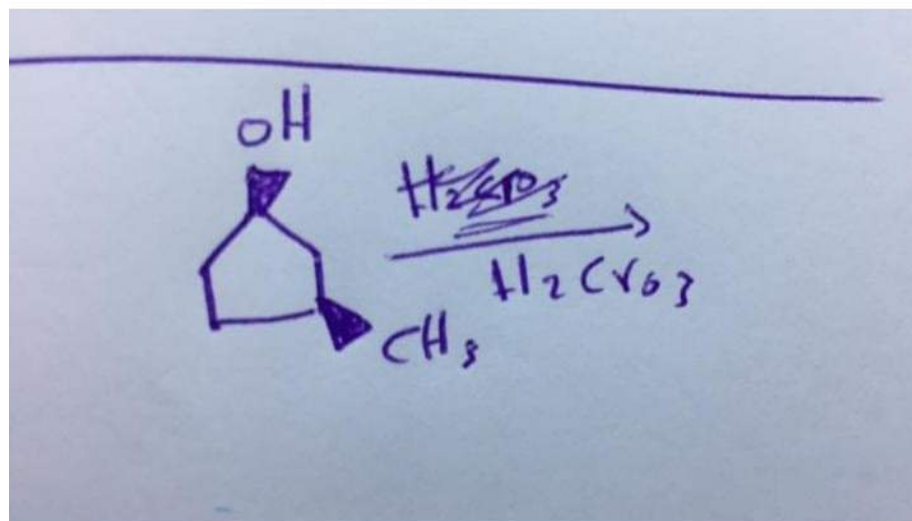


يوسف حاتم الطراونة

December 30, 2018 · 📍



مش متأكد من العامل المؤكسد طلب شو يكون الناتج
انا حطيت
Optically active ketone



👍📍 Hamzeh Sar and 4 others

4 Comments



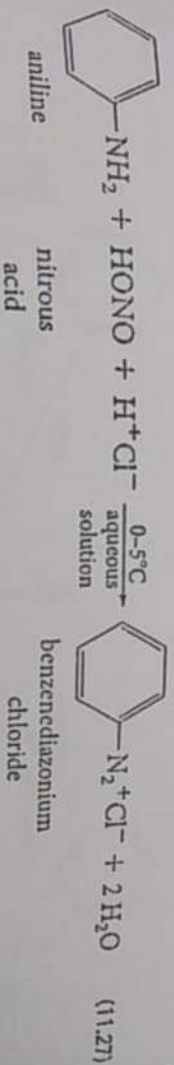
Choline is not only involved in various metabolic processes, but is also the precursor of **acetylcholine** (page 327), a compound that plays a key role in the transmission of nerve impulses. The mushroom *Amanita muscaria* contains the deadly neurotoxin muscarine, which structurally resembles acetylcholine and probably interferes with the function of this neurotransmitter.



Amanita muscaria, a source of muscarine.

11.12 Aromatic Diazonium Compounds

Primary aromatic amines react with nitrous acid at 0°C to yield aryl diazonium ions. The process is called **diazotization**.



In diazotization, primary aromatic amines react with nitrous acid to form aryl diazonium ions.

Diazonium compounds are extremely useful synthetic intermediates. Before we describe their chemistry, let us try to understand the steps in eq. 11.27. First, we need to examine the structure of nitrous acid.

Nitrous acid decomposes rather rapidly at room temperature. It is therefore prepared as needed by treating an aqueous solution of sodium nitrite with a strong acid at ice

See More [هاي المعادلة](#)

Hamzeh Sar and 1 other

Like

Comment



عبدالله's Post

Like

Comment

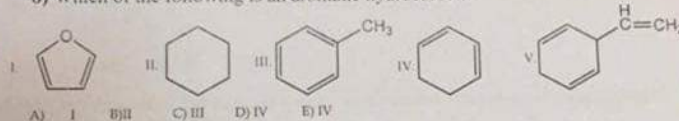
6) Which of the following statements describes the first step in the mechanism of the aldol condensation?

- A) The alpha hydrogen is abstracted by the base to form an enolate anion.
- B) A nucleophilic base attacks the carbonyl oxygen atom.
- C) The carbonyl oxygen is protonated by the base ion.
- D) The alpha hydrogen is abstracted by an acid to the enolate anion.
- E) The carbonyl oxygen of one aldehyde attacks the carbonyl carbon of another.

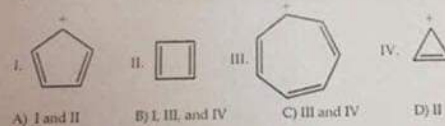
7) Aromatic molecules contain _____ π electron

- A) no
- B) $4n + 2$ (with n being an integer)
- C) $4n + 2$ (with n being 0.5)
- D) $4n$ (with n an integer)
- E) Unpaired

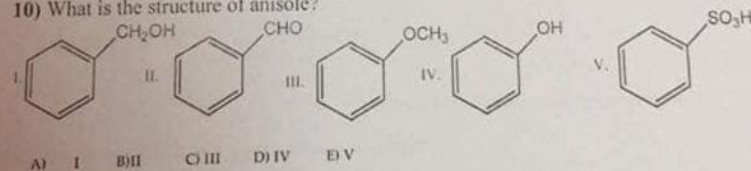
8) Which of the following is an aromatic hydrocarbon?



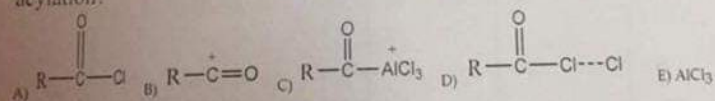
9) Which of the structures below would not be aromatic?



10) What is the structure of anisole?



11) Which of the following is the electrophile that attacks the aromatic ring during Friedel-Crafts acylation?



Like

Comment

12) Which of the following compounds reacts most slowly during nitration?

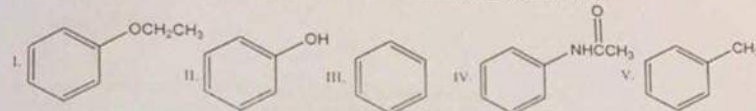


عبدالله's Post

Like

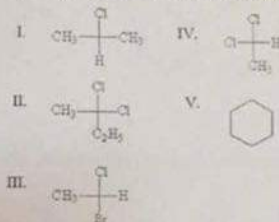
Comment

12) Which of the following compounds reacts most slowly during nitration?



A) I B) II C) III D) IV E) V

13) Which of the following compounds has a chiral carbon atom?

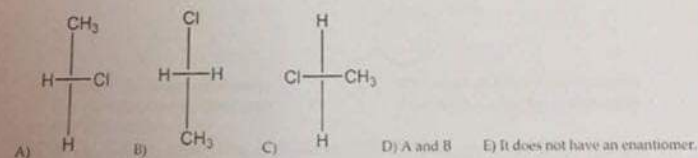


A) I B) II C) III D) IV E) V

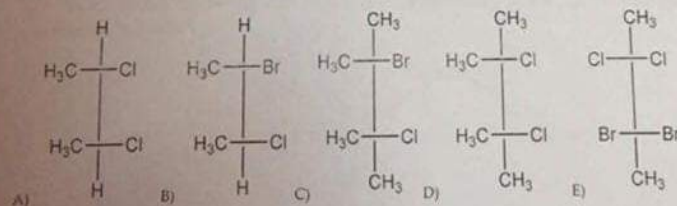
14) How many chiral carbons are present in a molecule of 2,4,6-trimethylheptane?

A) 0 B) 1 C) 2 D) 3 E) 4

15) Which of the following compounds is an enantiomer of the structure below?



16) Which of the following compounds is chiral?



Like

Comment

17) Which of the following statements correctly describes the molecule shown below?



Like

Comment

45) Which of the following is the strongest Bronsted base?

A) B B) C C) D D) A

46) Which of the following is a 3° amine?

A) 1-methylcyclohexylamine B) triethylamine C) *tert*-butylamine D) *N*-methylaniline

47) What product or products are expected from acid-catalyzed hydrolysis of the following compound?

A) Only the starting material itself (no reaction) B) Benzaldehyde and 2,2-dimethyl-1,3-propanediol
C) Benzoic acid and 2,2-dimethyl-1,3-propanediol D) 2-phenyl-1,3-propanediol and acetone

48) Which is the major product of the following reaction?

a)

b)

c)

d)

49) Which is the best procedure for the following preparation?

a) $\text{CH}_3\text{MgBr} \xrightarrow{\text{H}_2\text{SO}_4} \xrightarrow{\text{K}_2\text{C}_2\text{O}_7, \text{H}_2\text{SO}_4}$

b) $\text{AgNH}_2 \xrightarrow{\text{NH}_3, \text{H}_2\text{O}} \xrightarrow{\text{CH}_3\text{MgBr}, \text{H}_2\text{SO}_4} \xrightarrow{\text{NaBH}_4, \text{H}_2\text{O}}$

c) $\text{NaBH}_4 \xrightarrow{\text{H}_2\text{O}} \xrightarrow{\text{HCl}} \xrightarrow{\text{Mg, ether}} \xrightarrow{\text{H}_2\text{CO}} \xrightarrow{\text{PCC}}$

d) $\text{LiAlH}_4 \xrightarrow{\text{H}_2\text{O}} \xrightarrow{\text{HBr}} \xrightarrow{\text{Mg, ether}} \xrightarrow{\text{CO}_2} \xrightarrow{\text{H}_2\text{O}^+}$

50) Which reactions yield the same carboxylic acid?

I.

II.

III.

IV.

A) I, II B) III, IV C) II, IV D) I, III

Like

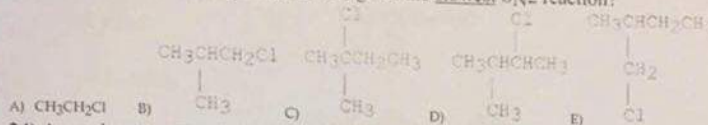
Comment



Like

Comment

23) Which of the following alkyl halides gives the slowest SN2 reaction?



24) Assuming no other changes, what is the effect of doubling only the concentration of the alkyl halide in the reaction below?



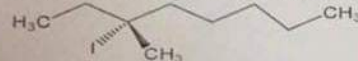
A) No change B) doubles the rate C) triples the rate D) quadruples the rate E) rate is halved

25) Assuming no other changes, what is the effect of doubling only the concentration of the iodide ion in the reaction below?



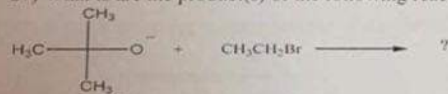
A) No change B) doubles the rate C) triples the rate D) quadruples the rate E) rate is halved

26) How many distinct alkene products, including stereoisomers, are possible when the alkyl iodide below undergoes E2 elimination?



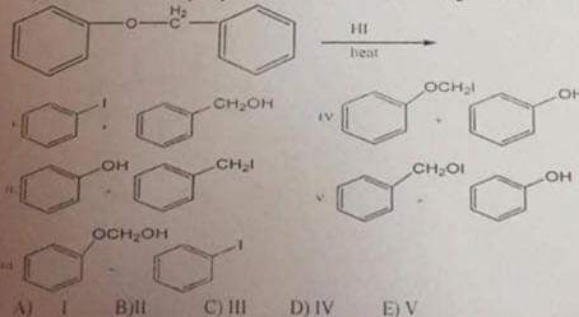
A) 2 B) 4 C) 5 D) 1 E) 3

27) What is/are the product(s) of the following reaction?



A) $\text{CH}_3\text{CH}_2\text{OC}(\text{CH}_3)_2$ B) n-Butanol C) $\text{CH}_3\text{C}(\text{CH}_3)=\text{CH}_2$ D) Diethyl ether E) None of the above.

28) What are the major products from the following reaction?





Like

Comment

32) What is the major product of the following reaction?

1- NaBH_4
2- H_3O^+

A) B) C) D) E)

33) Which of the following aldehydes does not undergo an aldol addition when mixed with base?

I. $\text{H}-\text{C}(=\text{O})-\text{H}$ II. III. IV. V.

A) I B) II C) III D) IV E) V

34) What is the major product of the following reaction?

I. II. III. IV. V.

A) I B) II C) III D) IV E) V

35) A mixture of unequal amounts of two enantiomers

A) Is called a racemic mixture B) is optically inactive
C) Implies that the enantiomers are meso forms D) both A and B
E) Optically active

36) If a solution contains 1 gm of (S)-glyceraldehyde in 10 ml ethanol has a specific rotation of -8.7° , what is the specific rotation of a solution contains 1 gm of (R)-glyceraldehyde in 5 ml ethanol (cell length = 1 dm)?

A) -8.7° B) $+8.7^\circ$ C) 0.0° D) $+4.35^\circ$ E) $+17.4^\circ$

Like

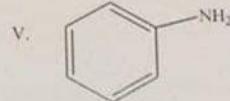
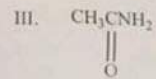
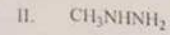

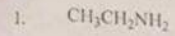
Comment



Like

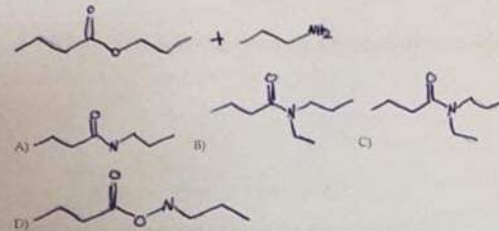
Comment

29) Which of the following compounds is a hydrazine?


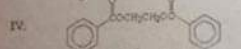
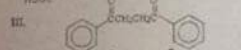
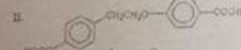
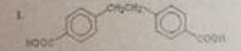



A) I B) II C) III D) IV E) V

30) Provide the product(s) for the following reaction:



31) What is the major organic product of the following reaction?



A) I B) II C) III D) IV E) V

Like

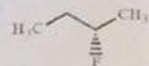
Comment



عبدالله's Post

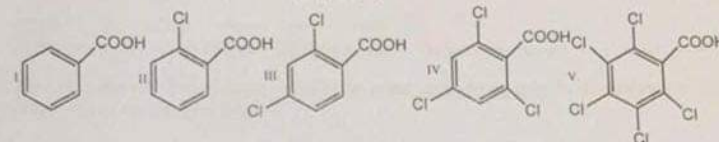


17) Which of the following statements correctly describes the molecule shown below?



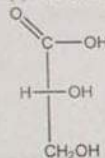
- A) It is achiral. B) It is meso C) Its chiral carbon possesses the R configuration.
D) Its chiral carbon possesses the S configuration E) The molecule possesses two chiral carbons

18) Which of the following is the weakest acid?



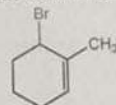
- A) I B) II C) III D) IV E) V

19) What is the absolute configuration of (-)-lactic acid?



- A) R configuration B) L configuration C) S configuration D) R and S configuration E) D and L configuration

20) The proper IUPAC name for the alkene shown below.

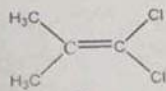


- A) 2-methyl-3-bromocyclohexene B) 1-methyl-6-bromocyclohexene
C) 6-bromo-1-methylcyclohexene D) 6-bromo-1-methylcyclohexane
E) None of the above.

21) Which of the following is capable of exhibiting *cis-trans* isomerism?

- A) 1-butene B) 2-pentene C) cyclohexene D) 1-pentene E) methylcyclohexane.

22) Which of the following best describes the geometry about the carbon-carbon double bond in the alkene below?



- A) Z B) E C) neither E nor Z D) Cis E) Trans



23) Which of the following alkyl halides gives the slowest SN2 reaction?



عبدالله's Post

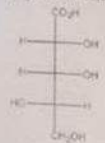


Like



Comment

37) How many enantiomeric pairs exist for the compound below?



- A) 4 B) 3 C) 9 D) 8 E) 16

38) Upon ozonolysis which alkene will give only acetone ($\text{CH}_3)_2\text{C}=\text{O}$?

- A) 2,3-dimethyl-2-butene B) 2,2-dimethyl-2-butene
C) 3-hexene D) 2-methyl-2-pentene
E) 2-methyl-3-hexene

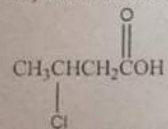
39) Which of the following is the most acidic?

- A) 2,4-dinitroaniline B) 4-nitrophenol C) Picric acid D) 2,4-dinitrophenol E) Phenol

40) Which of the following is the least basic?

- A) 2-Chloroaniline B) 2,4-Dichloroaniline
C) 2,4,6-Trichloroaniline D) Aniline
E) 2,3,4,5,6-Pentachloroaniline

41) What is the common name for the following compound?



- A) α -Chlorobutanoic acid B) β -Chlorobutanoic acid
C) β -Chlorobutyric acid D) α -Chlorobutyric acid
E) 3-Chlorobutyric acid

42) The Hinsberg test of a $\text{C}_3\text{H}_{14}\text{N}_2$ compound produces a solid that is insoluble in 10% aq. NaOH . This solid derivative dissolves in 10% aq. sulfuric acid. Which of the following would best fit these facts?

- A) $\text{NH}_2\text{CH}_2\text{CH}_2\text{CH}_2\text{N}(\text{CH}_3)_2$ B) $(\text{CH}_3)_2\text{NCH}_2\text{CH}_2\text{NHCH}_3$
C) $\text{NH}_2\text{CH}_2\text{C}(\text{CH}_3)_2\text{CH}_2\text{NH}_2$ D) $(\text{CH}_3)_2\text{NCH}_2\text{N}(\text{CH}_3)_2$

43) Reaction of *para*-chloroaniline with acetic anhydride in pyridine gave a mixture of 94% of *para*-chloroacetanilide, contaminated with 6% unreacted amine. Which of the following work-ups would be best used to purify the amide?

- A) React the unreacted amine with methyl iodide.
B) Wash an ether solution of the crude product with concentrated brine (aq. NaCl).
C) Wash an ether solution of the crude product with 5% aqueous sulfuric acid.
D) Wash an ether solution of the crude product with 5% aqueous sodium carbonate

44) Which of the following reagents would be best for converting phenylacetamide ($\text{C}_6\text{H}_5\text{CH}_2\text{CONH}_2$) to benzylamine ($\text{C}_6\text{H}_5\text{CH}_2\text{NH}_2$)?

- A) LiAlH_4 in ether. B) H_2 & Pt catalyst. C) Aqueous NaOBr . D) None of the above



Like



Comment