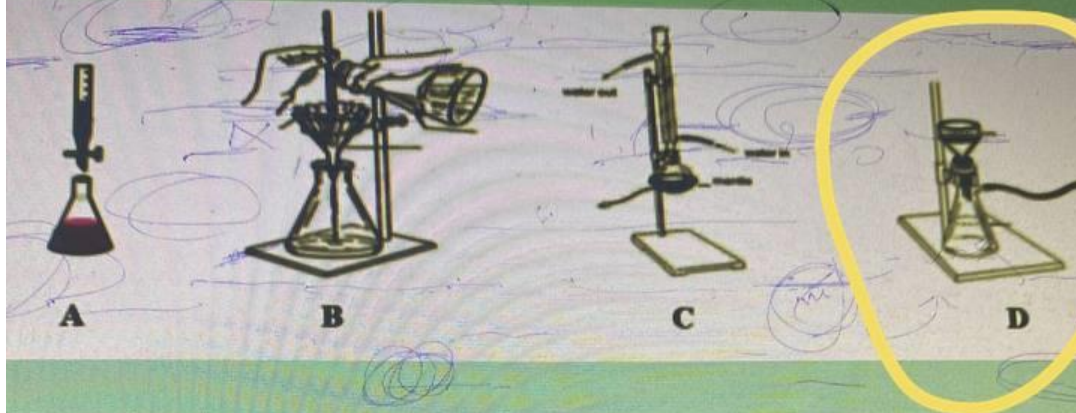


Which of the following figure is represent a vacuum filtration?



Select one:

- I. C
- II. A
- III. D
- IV. B


Which of the following figure is represent a vacuum filtration?



A



B



C

Select one:

I. C

II. A

III. D

IV. B

مختبر كيمياء عامه

n

4	5	6	7
1	12	13	14
8	19	20	21
5			

Question **16**

Not yet
answered

Marked out of
1.00

Flag question

Lucas test is used to determine which functional group?

Select one:

- a. Aldehydes
- b. Alcohols
- c. Acids
- d. Phenol
- e. Aromatic hydrocarbons

Previous page

Question 8

Answer saved

Marked out of
1.00

Flag question

The drug Aspirin act as:

Select one:

- a. antipyretic
- b. an analgesic
- c. All of the above
- d. Anti-inflammatory
- e. Also inhibit platelet aggregation

[Clear my choice](#)

Previous page

Next page

7

14

21

Question 7

Answer saved

Marked out of
1.00

Flag question

Which one of the following reactions generates CO_2 gas?

Select one:

- a. Na_2CO_3 and NaHCO_3
- b. HCl and NH_4Cl
- c. H_2SO_4 and Na_2SO_4
- d. HCl and Na_2CO_3
- e. NaCl and Na_2CO_3

[Clear my choice](#)

Previous page

Next

5	6	7
12	13	14
19	20	21

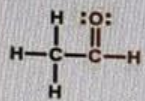
Question 4

Not yet answered

Marked out of 1.00

Flag question

Which of the following compound does not give Iodoform test?



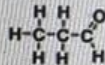
A)



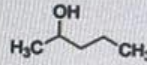
B)



C)



D)



E)

Select one:

- I. A
- II. D
- III. C
- IV. E
- V. B

Previous page

Question 5

Answer saved

Marked out of
1.00

Flag question

Which is used for treatment of acidity?

Select one:

- a. Antibiotic
- b. Antiseptic
- c. Antacid
- d. Analgesic

[Clear my choice](#)

Previous page

Next page


Question 10

Answer saved

Marked out of 10

Flag question

The compound that responds to Tollens' test is:



Select one:

- I. E
- II. C
- III. B
- IV. D
- V. A

[Clear my choice](#)

[Previous page](#)

[Next page](#)

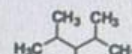
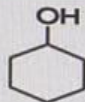
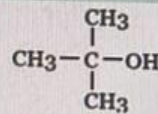
Question 6

Answer saved

Marked out of 1.00

Flag question

Which of following compound is a tertiary alcohol?



Select one:

I. A

II. D

III. B

IV. C

V. E

[Clear my choice](#)

Previous page

Next page